

CHAPTER 11

MODERN ATOMIC THEORY

*To see a World in a Grain of Sand
And a Heaven in a Wild Flower
Hold Infinity in the palm of your hand
And Eternity in an hour*

William Blake (1757-1827)

Auguries of Innocence

11.1 The Mysterious Electron

11.2 Multi-Electron Atoms

Scientists' attempts to understand the atom have led them into the unfamiliar world of the unimaginably small, where the rules of physics seem to be different from the rules in the world we can see and touch. Scientists explore this world through the use of mathematics. Perhaps this is similar to the way a writer uses poetry to express ideas and feelings beyond the reach of everyday language. Mathematics allows the scientist to explore beyond the boundaries of the world we can experience directly. Just as scholars then try to analyze the poems and share ideas about them in everyday language, scientists try to translate the mathematical description of the atom into words that more of us can understand. Although both kinds of translation are fated to fall short of capturing the fundamental truths of human nature and the physical world, the attempt is worthwhile for the occasional glimpse of those truths that it provides.

This chapter offers a brief, qualitative introduction to the mathematical description of electrons and describes the highly utilitarian model of atomic structure that chemists have constructed from it. Because we are reaching beyond the world of our senses, we should not be surprised that the model we create is uncertain and, when described in normal language, a bit vague. In spite of these limitations, however, you will return from your journey into the strange, new world of the extremely small with a useful tool for explaining and predicting the behavior of matter.



Chemists try to “see” the structure of matter even more closely than can be seen in any photograph.

Review Skills

The presentation of information in this chapter assumes that you can already perform the tasks listed below. You can test your readiness to proceed by answering the Review Questions at the end of the chapter. This might also be a good time to read the Chapter Objectives, which precede the Review Questions.

- Describe the nuclear model of the atom. (Section 3.4)
- Describe the relationship between stability and potential energy. (Section 8.1)

11.1 The Mysterious Electron

Where there is an open mind, there will always be a frontier.

Charles F. Kettering (1876-1958)
American engineer and inventor

Scientists have known for a long time that it is incorrect to think of electrons as tiny particles orbiting the nucleus like planets around the sun. Nevertheless, nonscientists have become used to picturing them in this way. In some circumstances, this “solar system” model of the atom may be useful, but you should know that the electron is much more unusual than that model suggests. The electron is extremely tiny, and modern physics tells us that strange things happen in the realm of the very, very small.

The modern description of the electron is based on complex mathematics and on the discoveries of modern physics. The mathematical complexity alone makes an accurate verbal portrayal of the electron challenging, but our difficulty in describing the electron goes beyond complexity. Modern physics tells us that it is impossible to know exactly where an electron is and what it is doing. As your mathematical and scientific knowledge increases, you will be able to understand more sophisticated descriptions of the electron, but the problem of describing exactly where the electron is and what it is doing never goes away. It is a problem fundamental to very tiny objects. Thus complete confidence in our description of the nature of the electron is beyond our reach.

There are two ways that scientists deal with the problems associated with the complexity and fundamental uncertainty of the modern description of the electron:

Analogies In order to communicate something of the nature of the electron, scientists often use analogies, comparing the electron to objects with which we are more familiar. For example, in this chapter we will be looking at the ways in which electrons are like vibrating guitar strings.

Probabilities In order to accommodate the uncertainty of the electron’s position and motion, scientists talk about where the electron probably is within the atom, instead of where it definitely is.

Through the use of analogies and a discussion of probabilities, this chapter attempts to give you a glimpse of what scientists are learning about the electron’s character.

Standing Waves and Guitar Strings

Each electron seems to have a dual nature in which both particle and wave characteristics are apparent. It is difficult to describe these two aspects of an electron at the same time, so sometimes we focus on its particle nature and sometimes on its wave character, depending on which is more suitable in a given context. In the particle view, electrons are tiny, negatively charged particles with a mass of about 9.1096×10^{-28} grams. In the wave view, an electron has an effect on the space around it that can be described as a wave of varying negative charge intensity. To gain a better understanding of this electron-wave character, let’s compare it to the wave character of guitar strings. Because a guitar string is easier to visualize than an electron, its vibrations serve as a useful analogy of the wave character of electrons.

When a guitar string is plucked, the string vibrates up and down in a wave pattern. Figure 11.1 shows one way that it can vibrate; the seven images on the left represent the position of the string at various isolated moments, and the final image shows all those positions combined. If you squint a bit while looking at a vibrating guitar string, what you see is a blur with a shape determined by the varying intensity of the vibration along the string. This blur, which we will call the **waveform**, appears to be stationary. Although the string is constantly moving, the waveform is not, so this wave pattern is called a **standing or stationary wave**. Note that as your eye moves along the string, the intensity, or amount, of the string's movement varies. The points in the waveform where there is no motion are called **nodes**.

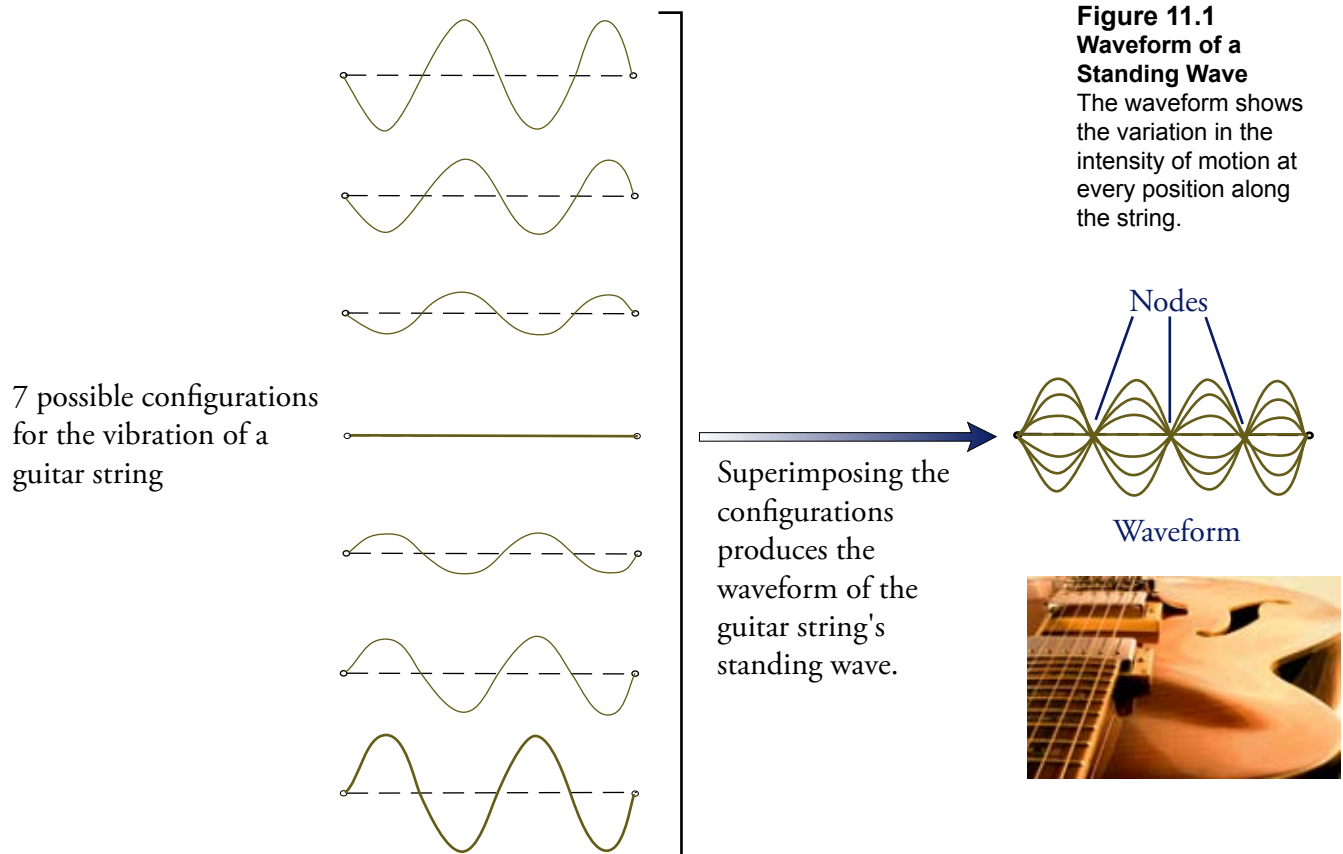


Figure 11.1
Waveform of a Standing Wave
The waveform shows the variation in the intensity of motion at every position along the string.

Although many waveforms are possible, the possibilities are limited by the fact that the string is tied down and cannot move at the ends. In theory, there are an infinite number of possible waveforms, but they all allow the string to remain stationary at the ends. Figure 11.2 shows various allowed waveforms.




Figure 11.2
Some Possible Waveforms for a Vibrating Guitar String

OBJECTIVE 2

Thus, the task is not so much to see what no one has yet seen, but to think what nobody has yet thought, about that which everybody sees.

Erwin Schrodinger
(1887-1961)

Austrian physicist and
Nobel laureate

Electrons as Standing Waves

The wave character of the guitar string is represented by the movement of the string. We can focus our attention on the blur of the waveform and forget the material the string is made of. The waveform describes the motion of the string over time, not the string itself.

In a similar way, the wave character of the electron is represented by the waveform of its negative charge, on which we can focus without concerning ourselves about the electron's particle nature. This frees us from asking questions about where the electrons are in the atom and how they are moving—questions that we are unable to answer. The waveforms for electrons in an atom describe the variation in intensity of negative charge within the atom, with respect to the location of the nucleus. This can be described without mentioning the positions and motion of the electron particle itself.

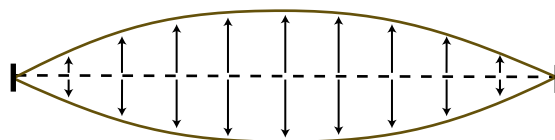
The following statements represent the core of the modern description of the wave character of the electron:

- Just as the intensity of the movement of a guitar string can vary, so can the intensity of the negative charge of the electron vary at different positions outside the nucleus.
- The variation in the intensity of the electron charge can be described in terms of a three-dimensional standing wave like the standing wave of the guitar string.
- As in the case of the guitar string, only certain waveforms are possible for the electron in an atom.
- We can focus our attention on the waveform of varying charge intensity without having to think about the actual physical nature of the electron.

Waveforms for Hydrogen Atoms

Most of the general descriptions of electrons found in the rest of this chapter are based on the wave mathematics for the one electron in a hydrogen atom. The comparable calculations for other elements are too difficult to lead to useful results, so as you will see in the next section, the information calculated for the hydrogen electron is used to describe the other elements as well. Fortunately, this approximation works quite well.

The wave equation for the one electron of a hydrogen atom predicts waveforms for the electron that are similar to the allowed waveforms for a vibrating guitar string. For example, the simplest allowed waveform for the guitar string looks something like



OBJECTIVE 4

The simplest allowed waveform for an electron in a hydrogen atom looks like the image in Figure 11.3. The cloud that you see surrounds the nucleus and represents the variation in the intensity of the negative charge at different positions outside the nucleus. The negative charge is most intense at the nucleus and diminishes with increasing distance from the nucleus. The variation in charge intensity for this waveform is the same in all directions, so the waveform is a sphere. The allowed waveforms for

the electron are also called **orbitals**. The orbital shown in Figure 11.3 is called the $1s$ orbital.

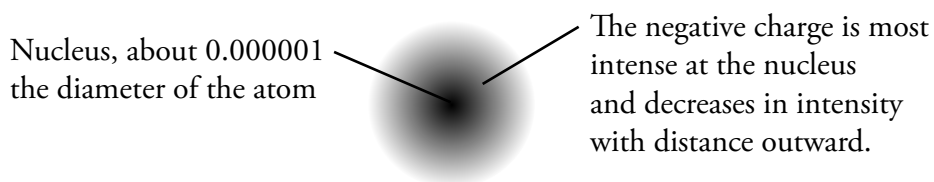


Figure 11.3
Waveform of the $1s$ Electron


OBJECTIVE 4

Theoretically, the charge intensity depicted in Figure 11.3 decreases toward zero as the distance from the nucleus approaches infinity. This suggests the amusing possibility that some of the negative charge created by an electron in a hydrogen atom is felt an infinite distance from the atom's nucleus. The more practical approach taken by chemists, however, is to specify a volume that contains most of the electron charge and focus their attention on that, forgetting about the small negative charge felt outside the specified volume. For example, we can focus on a sphere containing 90% of the charge of the $1s$ electron. If we wanted to include more of the electron charge, we enlarge the sphere so that it encloses 99% (or 99.9%) of the electron charge (Figure 11.4). This leads us to another definition of **orbital** as the volume that contains a given high percentage of the electron charge.

Most of the pictures you will see of orbitals represent the hypothetical surfaces that surround a high percentage of the negative charge of an electron of a given waveform. The $1s$ orbital, for example, can either be represented by a fuzzy sphere depicting the varying intensity of the negative charge (Figure 11.3) or by a smooth spherical surface depicting the boundary within which most of the charge is to be found (Figure 11.4).

OBJECTIVE 4

Almost all of the electron's charge lies within a spherical shell with the diameter of this circle.



Sphere enclosing almost all of the electron's negative charge




Figure 11.4
 $1s$ Orbital

OBJECTIVE 4

Is the sphere in Figure 11.3 the $1s$ electron? This is like asking if the guitar string is the blur that you see when the string vibrates. When we describe the standing wave that represents the motion of a guitar string, we generally do not refer to the material composition of the string. The situation is very similar for the electron. We are able to describe the variation in intensity of the negative charge created by the electron without thinking too much about what the electron is and what it is doing.

Scientific knowledge is a body of statements of varying certainty—about some of them we are mostly unsure, some are nearly certain, none are absolutely certain.

Richard Feynman, 1965
Winner of the Noble
Prize in Physics

OBJECTIVE 5

Particle Interpretation of the Wave Character of the Electron

So, where is the electron and what is it doing? We do not really know, and modern physics tells us that we never will know with 100% certainty. However, with information derived from wave mathematics for an electron, we can predict where the electron probably is. According to the particle interpretation of the wave character of the electron, the surface that surrounds 90% of an electron's charge is the surface within which we have a 90% probability of finding the electron. We could say that the electron spends 90% of its time within the space enclosed by that surface. Thus an **orbital** can also be defined as the volume within which an electron has a high probability of being found.

It is not difficult to visualize a reasonable path for an electron in a $1s$ orbital, but as you will see later in this section, the shapes of orbitals get much more complex than the simple sphere of the $1s$ orbital. For this reason, we do not attempt to visualize the path an electron follows in an orbital.

How should we picture the electron? Perhaps the best image is the one we used in Chapter 3: a cloud. Our interpretation of the nature of the electron cloud will differ, however, depending on whether we are considering the charge of the electron or its particle nature.

If we wish to consider the charge of the electron, the electron cloud represents the continuous variation in the intensity of the negative charge; it is stronger near the nucleus and weaker with increasing distance away from the nucleus, like the fuzzy sphere pictured in Figure 11.3.

In the particle view, the electron cloud can be compared to a multiple-exposure photograph of the electron. (Once again, we must resort to an analogy to describe electron behavior.) If we were able to take a series of sharply focused photos of an electron over a period of time without advancing the film, our final picture would look like Figure 11.5. We would find a high density of dots near the nucleus and a decrease in density with increasing distance from the nucleus (because there is a higher probability of finding the electron in a volume near the nucleus than in the same volume farther away). This arrangement of dots would illustrate the wave equation's prediction of the probability of finding the electron at any given distance from the nucleus.



If enough photos of this dancer are combined, we see a blur instead of an individual dancer. This dancer-blur is like an electron cloud.

OBJECTIVE 4

A multiple exposure picture of the electron in a $1s$ orbital of a hydrogen atom might look like this.




Figure 11.5
Particle Interpretation of a $1s$ Orbital

Other Important Orbitals

Just like the guitar string can have different waveforms, the one electron in a hydrogen atom can also have different waveforms, or orbitals. The shapes and sizes for these orbitals are predicted by the mathematics associated with the wave character of the hydrogen electron. Figure 11.6 shows some of them.

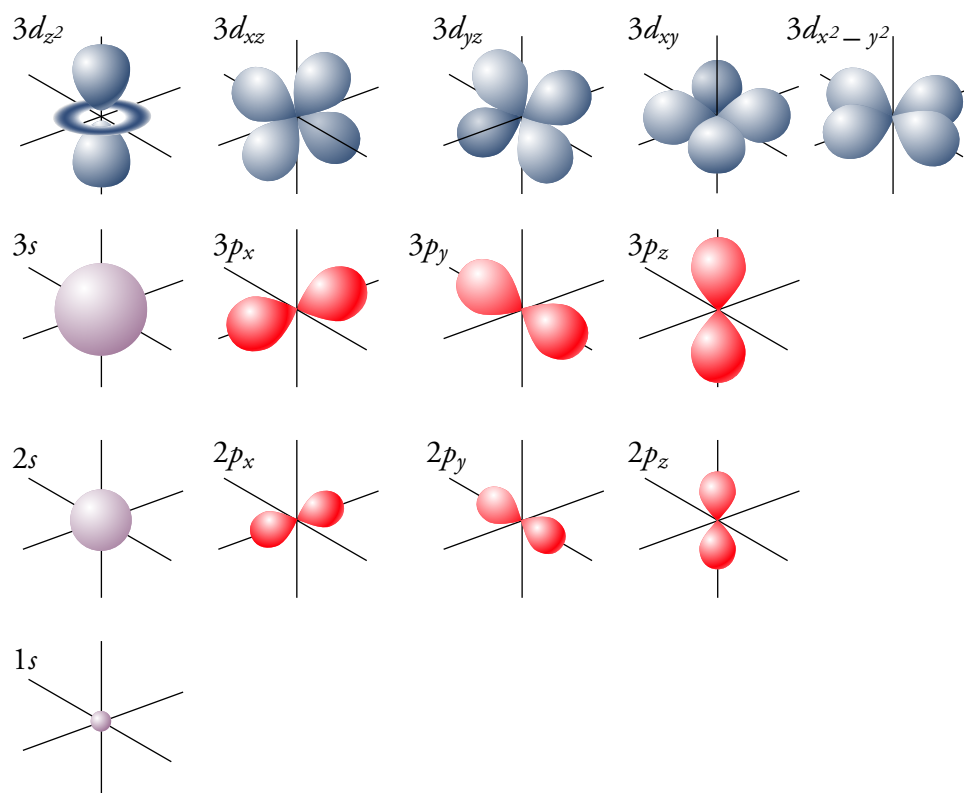
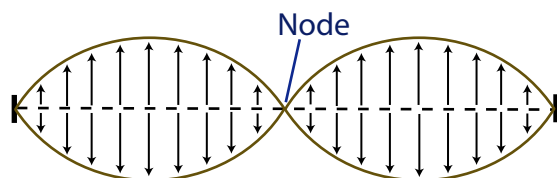


Figure 11.6
Some Possible Waveforms,
or Orbitals, for an Electron
in a Hydrogen Atom

Before considering the second possible orbital for the electron of a hydrogen atom, let's look at another of the possible ways a guitar string can vibrate. The guitar string waveform below has a node in the center where there is no movement of the string.




The electron-wave calculations predict that an electron in a hydrogen atom can have a waveform called the $2s$ orbital that is analogous to the guitar string waveform above. The $2s$ orbital for an electron in a hydrogen atom is spherical like the $1s$ orbital, but it is a larger sphere. All spherical electron waveforms are called s orbitals. For an electron in the $2s$ orbital, the charge is most intense at the nucleus. With increasing distance from the nucleus, the charge diminishes in intensity until it reaches a minimum at a certain distance from the nucleus; it then increases again to a maximum, and finally it

diminishes again. The region within the $2s$ orbital where the charge intensity decreases to zero is called a node. Figure 11.7 shows cutaway, quarter-section views of the $1s$ and $2s$ orbitals.

Figure 11.7
Quarter Sections of the $1s$
and $2s$ Orbitals

OBJECTIVE 6



OBJECTIVE 7

The average distance between the positive charge of the nucleus and the negative charge of a $2s$ electron cloud is greater than the average distance between the nucleus and the charge of a $1s$ electron cloud. Because the strength of the attraction between positive and negative charges decreases with increasing distance between the charges, an electron is more strongly attracted to the nucleus and therefore is more stable when it has the smaller $1s$ waveform than when it has the larger $2s$ waveform. As you discovered in Section 8.1, increased stability is associated with decreased potential energy, so a $1s$ electron has lower potential energy than a $2s$ electron¹. We describe this energy difference by saying the $1s$ electron is in the first principal energy level, and the $2s$ electron is in the second principal energy level. All of the orbitals that have the same potential energy for a hydrogen atom are said to be in the same **principal energy level**. The principal energy levels are often called shells. The 1 in $1s$ and the 2 in $2s$ show the principal energy levels, or shells, for these orbitals.

Chemists sometimes draw orbital diagrams, such as the following, with lines to represent the orbitals in an atom and arrows (which we will be adding later) to represent electrons:



The line representing the $2s$ orbital is higher on the page to indicate its higher potential energy.

Because electrons seek the lowest energy level possible, we expect the electron in a hydrogen atom to have the $1s$ waveform, or electron cloud. We say that the electron is in the $1s$ orbital. But the electron in a hydrogen atom does not need to stay in the $1s$ orbital at all times. Just as an input of energy (a little arm work on our part) can lift a book resting on a table and raise it to a position that has greater potential energy, so can the waveform of an electron in a hydrogen atom be changed from the $1s$ shape to the $2s$ shape by the addition of energy to the atom. We say that the electron can be excited from the $1s$ orbital to the $2s$ orbital. Hydrogen atoms with their electron in the

¹ If you are reading this chapter before studying Chapter 8, you might want to read the portions of Section 8.1 that describe energy, kinetic energy, and potential energy.

$1s$ orbital are said to be in their **ground state**. A hydrogen atom with its electron in the $2s$ orbital is in an **excited state**.

If you lift a book from a table to above the table and then release it, it falls back down to its lower-energy position on the table. The same is true for the electron. After the electron is excited from the $1s$ orbital to the $2s$ orbital, it spontaneously returns to its lower-energy $1s$ form.

An electron in a hydrogen atom can be excited to orbitals other than the $2s$. For example, an electron in a hydrogen atom can be excited from the $1s$ to a $2p$ orbital. There are actually three possible $2p$ orbitals. They are identical in shape and size, but each lies at a 90° angle to the other two. Because they can be viewed as lying on the x , y and z axes of a three-dimensional coordinate system, they are often called the $2p_x$, $2p_y$, and $2p_z$ orbitals. An electron with a $2p$ waveform has its negative charge distributed in two lobes on opposite sides of the nucleus. Figure 11.8 shows the shape of a $2p_z$ orbital.

In order to more easily show how the $2p$ orbitals fit together, they are often drawn in a more elongated and stylized form (Figures 11.9 and 11.10).



The energy generated by the explosives in fireworks supplies the energy to excite electrons to higher energy levels. When the electrons return to their ground state, they give off energy in the form of light.

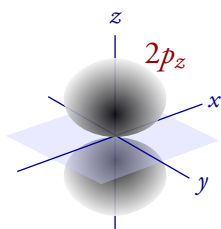


Figure 11.8
Realistic View of a
 $2p_z$ Orbital

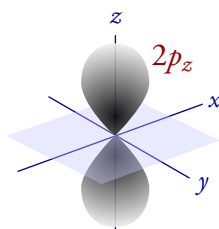


Figure 11.9
Stylized View of a
 $2p_z$ Orbital

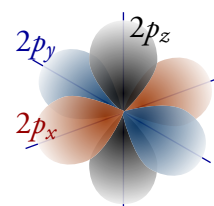
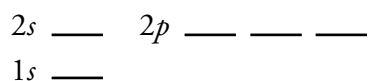


Figure 11.10
Stylized View of a
 $2p_x$, $2p_y$, and $2p_z$
Orbitals Combined

OBJECTIVE 8

In a hydrogen atom, the average distance between the negative charge of a $2p$ electron cloud and the nucleus is the same as for a $2s$ electron cloud. Therefore, an electron in a hydrogen atom has the same attraction to the nucleus and the same stability when it has a $2p$ form as when it has the $2s$ form. Therefore, a $2s$ electron has the same potential energy as a $2p$ electron. These orbitals are in the same principal energy level.

Because the shapes of the $2s$ and $2p$ electron clouds are different, we distinguish between them by saying that an electron with the $2s$ waveform is in the $2s$ sublevel, and an electron with any of the three $2p$ waveforms is in the $2p$ sublevel. Orbitals that have the same potential energy, the same size, and the same shape are in the same **sublevel**. The sublevels are sometimes called **subshells**. Thus there is one orbital in the $1s$ sublevel, one orbital in the $2s$ sublevel, and three orbitals in the $2p$ sublevel. The following orbital diagram shows these orbitals and sublevels.




The lines for the $2s$ and $2p$ orbitals are drawn side by side to show that they have the same potential energy for the one electron in a hydrogen atom. You will see in the next section that the $2s$ and $2p$ orbitals have different potential energies for atoms larger than hydrogen atoms.


OBJECTIVE 9

In the third principal energy level, there are nine possible waveforms for an electron, in three different sublevels (Figure 11.6). The $3s$ sublevel has one orbital that has a spherical shape, like the $1s$ and the $2s$, but it has a larger average radius and two nodes. Its greater average distance from the positive charge of the nucleus makes it less stable and higher in energy than the $1s$ or $2s$ orbitals. The calculations predict that the third principal energy level has a $3p$ sublevel, with three $3p$ orbitals. They have the same general shape as the $2p$ orbitals, but they are larger, which leads to less attraction to the nucleus, less stability, and higher potential energy than for a $2p$ orbital. The third principal energy level also has a $3d$ sublevel, with five $3d$ orbitals. Four of these orbitals have four lobes whose shape is similar to the lobes of a $3p$ orbital. We will call these “double dumbbells.” An electron in a $3d$ orbital has its negative charge spread out in these four lobes. The fifth $3d$ orbital has a different shape, as shown in Figure 11.11.

Four of the five $3d$ orbitals have a double dumbbell shape like this one.



The fifth $3d$ orbital is shaped like a dumbbell and a donut.



OBJECTIVE 9

Figure 11.11
3d Orbitals

When an electron in a hydrogen atom is excited to the fourth principal energy level, it can be in any one of four sublevels: $4s$, $4p$, $4d$, or $4f$. There is one $4s$ orbital, with a spherical shape and a larger volume than the $3s$. There are three $4p$ orbitals, similar in shape to the $3p$ orbitals but with a larger volume than the $3p$ orbitals. There are five $4d$ orbitals, similar to but larger than the $3d$ orbitals. The $4f$ sublevel has seven possible orbitals.

Overall Organization of Principal Energy Levels, Sublevels, and Orbitals

Table 11.1 shows all the orbitals predicted for the first seven principal energy levels. Notice that the first principal energy level has one sublevel, the second has two sublevels, the third has three sublevels, and the fourth has four. If n is the number associated with the principal energy level, each principal energy level has n sublevels. Thus there are five sublevels on the fifth principal energy level: $5s$, $5p$, $5d$, $5f$, and $5g$. The $5s$, $5p$, $5d$, and $5f$ orbitals have shapes similar to the $4s$, $4p$, $4d$, and $4f$ orbitals, but they are larger and have higher potential energy.

Each s sublevel has one orbital, each p sublevel has three orbitals, each d has five orbitals, and each f sublevel has seven orbitals. Thus, there are one $5s$ orbital, three $5p$ orbitals, five $5d$ orbitals, and seven $5f$ orbitals. The trend of increasing the number of orbitals by two for each succeeding sublevel continues for $5g$ and beyond. There are nine $5g$ orbitals with shapes more complex than the shapes of the $4f$ orbitals.

Table 11.1 Possible Sublevels and Orbitals for the First Seven Principal Energy Levels (The sublevels in parentheses are not necessary for describing any of the known elements.)

Sublevels (subshells)	Number of orbitals	Sublevels (subshells)	Number of orbitals
1s	1	6s	1
2s	1	6p	3
2p	3	6d	5
3s	1	(6f)	7
3p	3	(6g)	9
3d	5	(6h)	11
4s	1	7s	1
4p	3	7p	3
4d	5	(7d)	5
4f	7	(7f)	7
5s	1	(7g)	9
5p	3	(7h)	11
5d	5	(7i)	13
5f	7		
(5g)	9		

In the next section, where we use the orbitals predicted for hydrogen to describe atoms of other elements, you will see that none of the known elements has electrons in the 5g sublevel for their most stable state (ground state). Thus we are not very interested in describing the 5g orbitals. Likewise, although the sixth principal energy level has six sublevels and the seventh has seven, only the 6s, 6p, 6d, 7s, and 7p are important for describing the ground states of the known elements. The reason for this will be explained in the next section.

None of the known elements in its ground state has any electrons in a principal energy level higher than the seventh, so we are not concerned with the principal energy levels above seven. The orbital diagram in Figure 11.12 shows only the sublevels (or subshells) and orbitals that are necessary for describing the ground states of the known elements.

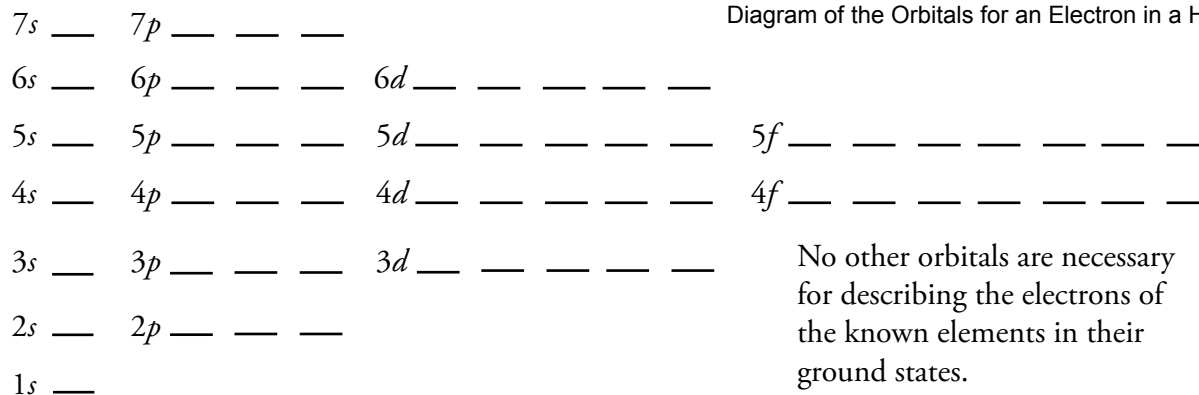


Figure 11.12

Diagram of the Orbitals for an Electron in a Hydrogen Atom

No other orbitals are necessary for describing the electrons of the known elements in their ground states.

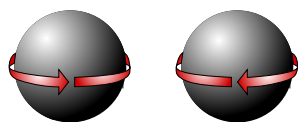
11.2 Multi-Electron Atoms

It is possible to solve the wave equation and determine the shapes and sizes of electron orbitals for the hydrogen atom and for any one electron ion (for example He^+ or Li^{2+}), but the calculations for any atom with two or more electrons are extremely complex. Fortunately, scientists have found that when they take the information derived from solving the wave equation for hydrogen atoms and apply it to other atoms, the resulting descriptions are sufficiently accurate to explain many of the chemical characteristics of those elements. Thus the following assumption lies at the core of the modern description of atoms other than hydrogen. *All of the elements have the same set of possible principal energy levels, sublevels, and orbitals that has been calculated for hydrogen.* In other words, we assume that all atoms can have the sublevels and orbitals listed on Table 11.1. Now let us look at how the electrons of elements other than hydrogen are distributed in those hydrogen-like orbitals.

Helium and Electron Spin

OBJECTIVE 10

Figure 11.13
Electron Spin



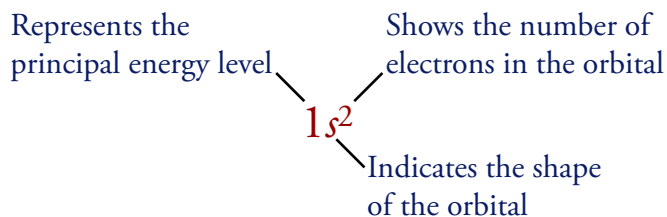
Helium, with atomic number 2 and two electrons, is the next element after hydrogen in the periodic table. Both of helium's electrons are in the $1s$ orbital. This allows them to be as close to the positive charge of the nucleus as possible. Even though the two electron charge clouds occupy the same space, the two electrons are not identical. The property in which they differ is called electron spin. Although the true nature of electron spin is uncertain, it is useful to think of it as if electrons can spin on their axis. We can visualize the two electrons in a helium atom as spinning in opposite directions (Figure 11.13).

OBJECTIVE 10

Arrows are added to an **orbital diagram** to show the distribution of electrons in the possible orbitals and the relative spin of each electron. The following is an orbital diagram for a helium atom.



The orbital distribution of electrons can also be described with a shorthand notation that describes the arrangement of electrons in the sublevels without reference to their spin. This shorthand for helium's configuration is written $1s^2$ and is commonly called an electron configuration. The 1 represents the first principal energy level, the s indicates an electron cloud with a spherical shape, and the 2 shows that there are two electrons in that $1s$ sublevel.



OBJECTIVE 11

In the broadest sense, an **electron configuration** is any description of the complete distribution of electrons in atomic orbitals. Although this can mean either an orbital diagram or the shorthand notation, this text will follow the common convention of referring to only the shorthand notation as an **electron configuration**. For example,

if you are asked for an electron configuration for helium, you will write $1s^2$. If you are expected to describe the orbitals with lines and the electrons with arrows, you will be asked to draw an orbital diagram.

The Second Period Elements

Electrons do not fill the available sublevels in the order we might expect. Thus, to predict the electron configurations of elements larger than helium, we need a way of remembering the actual order of sublevel filling. Probably the *least* reliable method is to memorize the following list that shows the order of filling of all the orbitals necessary for describing the ground state electron configurations of all of the known elements.

$1s$ $2s$ $2p$ $3s$ $3p$ $4s$ $3d$ $4p$ $5s$ $4d$ $5p$ $6s$ $4f$ $5d$ $6p$ $7s$ $5f$ $6d$ $7p$

OBJECTIVE 11

Instead of relying on memorization, you can use the memory aid shown in Figure 11.14 to remind you of the correct order of filling of the sublevels. The following steps explain how to write it and use it yourself.

- Write the possible sublevels for each energy level in organized rows and columns like in Figure 11.14. To do this, you need to remember that there is one sublevel on the first principal energy level, two on the second, three on the third, etc. Every principal energy level has an s orbital. The second principal energy level and all higher energy levels have a p sublevel. The d sublevels start on the third principal energy level, the f sublevels start on the fourth principal energy level, etc.
- Draw arrows like those you see in Figure 11.14.
- Starting with the top arrow, follow the arrows one by one in the direction they point, listing the sublevels as you pass through them.

The sublevels that are not needed for describing the known elements are enclosed in parentheses in Figure 11.14. Later in this section, you will see how to determine the order of filling of the sublevels using a periodic table.

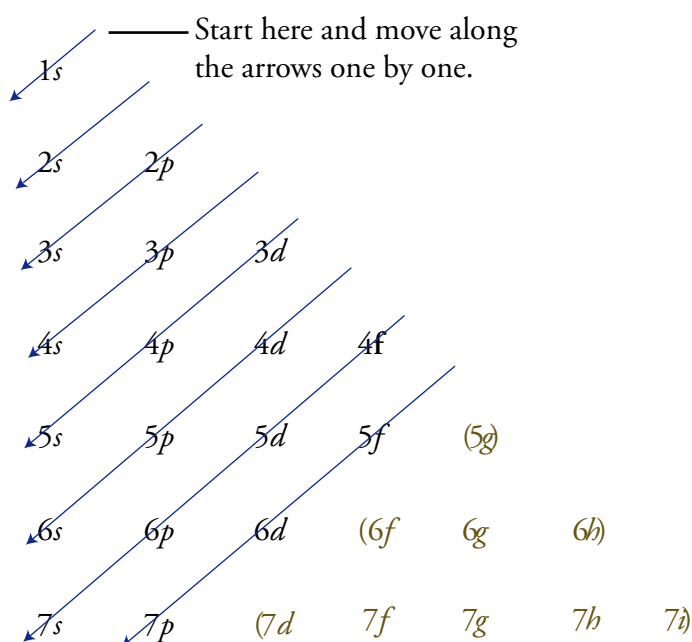


Figure 11.14
Aid for Remembering the Order
of Sublevel Filling


OBJECTIVE 11

An atomic orbital may contain two electrons at most, and the electrons must have different spins. Because each s sublevel has one orbital and each orbital contains a maximum of two electrons, each s sublevel contains a maximum of two electrons. Because each p sublevel has three orbitals and each orbital contains a maximum of two electrons, each p sublevel contains a maximum of six electrons. Using similar reasoning, we can determine that each d sublevel contains a maximum of ten electrons, and each f sublevel contains a maximum of 14 electrons (Table 11.2).

Table 11.2 General Information About Sublevels

Type of Sublevel	Number of Orbitals	Maximum Number of Electrons
s	1	2
p	3	6
d	5	10
f	7	14

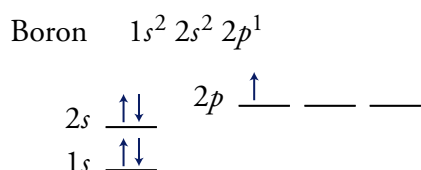
We can now predict the electron configurations and orbital diagrams for the ground state of lithium, which has three electrons, and beryllium, which has four electrons:



OBJECTIVE 11

OBJECTIVE 12

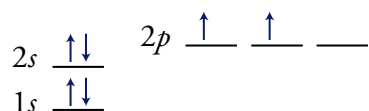
A boron atom has five electrons. The first four fill the $1s$ and $2s$ orbitals, and the fifth electron goes into a $2p$ orbital. The electron configuration and orbital diagram for the ground state of boron atoms are below. Even though only one of three possible $2p$ orbitals contains an electron, we show all three $2p$ orbitals in the orbital diagram. The lines for the $2p$ orbitals are drawn higher on the page than the line for the $2s$ orbital to show that electrons in the $2p$ orbitals have a higher potential energy than electrons in the $2s$ orbital of the same atom.³



OBJECTIVE 11

OBJECTIVE 12

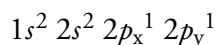
When electrons are filling orbitals of the same energy, they enter orbitals in such a way as to maximize the number of unpaired electrons, all with the same spin. In other words, they enter empty orbitals first, and all electrons in half filled orbitals have the same spin. The orbital diagram for the ground state of carbon atoms is



OBJECTIVE 12

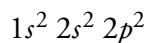
¹ The $2s$ and $2p$ orbitals available for the one electron of a hydrogen atom have the same potential energy. However, for reasons that are beyond the scope of this discussion, when an atom has more than one electron, the $2s$ orbital is lower in potential energy than the $2p$ orbitals.

There are two ways to write the electron configuration of carbon atoms. One way emphasizes that the two electrons in the $2p$ sublevel are in different orbitals:



OBJECTIVE 11

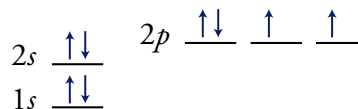
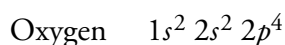
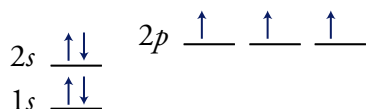

Often, however, the arrangement of the $2p$ electrons is taken for granted, and the following notation is used:



OBJECTIVE 11

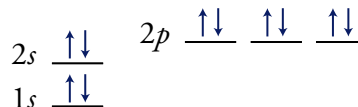
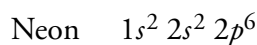
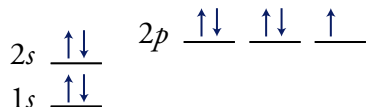
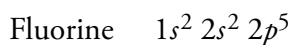
Unless you are told otherwise, you may assume that a “complete electron configuration” means a configuration written in the second form, without the subscripts x , y , and z .

The electron configurations and orbital diagrams for the rest of the elements of the second period show the sequential filling of the $2p$ orbitals:



OBJECTIVE 11

OBJECTIVE 12


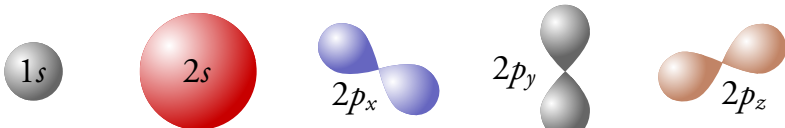

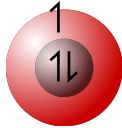

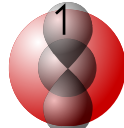
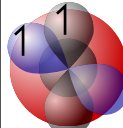
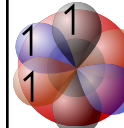
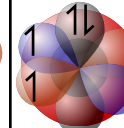
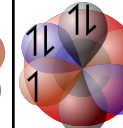
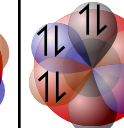


OBJECTIVE 11

OBJECTIVE 12

Figure 11.15 shows how the electron clouds for the electrons of the atoms of first and second period elements are envisioned. Note that the electron charge waveforms for the electrons in different orbitals of each atom are all superimposed on each other.

Figure 11.15
Electron Configurations and Orbital
Models for the First Ten Elements

1 H $1s^1$ 							2 He $1s^2$ 
3 Li $1s^2 2s^1$ 	4 Be $1s^2 2s^2$ 	5 B $1s^2 2s^2 2p^1$ 	6 C $1s^2 2s^2 2p^2$ 	7 N $1s^2 2s^2 2p^3$ 	8 O $1s^2 2s^2 2p^4$ 	9 F $1s^2 2s^2 2p^5$ 	10 Ne $1s^2 2s^2 2p^6$ 

in the periodic table are in s orbitals. That is, the highest-energy electrons for lithium, Li, and beryllium, Be, atoms are in the $2s$ orbital, and the highest-energy electrons for sodium, Na, and magnesium, Mg, atoms are in the $3s$ orbital. This continues down to francium, Fr, and radium, Ra, which have their highest-energy electrons in the $7s$ orbital. Therefore, the first two columns on the periodic table are called the s block. Because hydrogen and helium have their electrons in the $1s$ orbital, they belong in the s block too (Figure 11.16).

All of the elements in the block with boron, B, neon, Ne, thallium, Tl, and radon, Rn, at the corners have their highest energy electrons in p orbitals, so this is called the p block (Figure 11.16). The second principal energy level is the first to contain p orbitals, so atoms of elements in the first row of the p block have their highest-energy electrons in the $2p$ sublevel. The highest-energy electrons for elements in the second row of the p block are in the $3p$ sublevel. This trend continues, so we can predict that the 81st through the 86th electrons for the elements thallium, Tl, through radon, Rn, are added to the $6p$ sublevel. Moreover, we can predict that the new elements that have been made with atoms larger than element 112 have their highest-energy electrons in the $7p$ sublevel.

The last electrons to be added to an orbital diagram for the atoms of the transition metal elements go into d orbitals. For example, the last electrons added to atoms of scandium, Sc, through zinc, Zn, are added to $3d$ orbitals. The elements yttrium, Y, through cadmium, Cd, have their highest-energy electrons in the $4d$ sublevel. The elements directly below them in rows 6 and 7 add electrons to the $5d$ and $6d$ orbitals. The transition metals can be called the d block. (Figure 11.16).

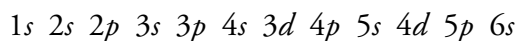
The section of the periodic table that contains the inner transition metals is called the f block. Thus we can predict that the last electrons added to the orbital diagrams of elements with atomic numbers 57 through 70 would go into the $4f$ sublevel. Elements 89 through 102 are in the second row of the f block. Because the fourth principal energy level is the first to have an f sublevel, we can predict that the highest energy-electrons for these elements go to the $5f$ sublevel.

We can also use the block organization of the periodic table, as shown in Figure 11.16, to remind us of the order in which sublevels are filled. To do this, we move through the elements in the order of increasing atomic number, listing new sublevels as we come to them. The type of sublevel (s , p , d , or f) is determined from the block in which the atomic number is found. The number for the principal energy level (for example, the 3 in $3p$) is determined from the row in which the element is found and the knowledge that the s sublevels start on the first principal energy level, the p sublevels start on the second principal energy level, the d sublevels start on the third principal energy level, and the f sublevels start on the fourth principal energy level.

- We know that the first two electrons added to an atom go to the $1s$ sublevel.
- Atomic numbers 3 and 4 are in the second row of the s block (look for them in the bottom half of Figure 11.16), signifying that the 3rd and 4th electrons are in the $2s$ sublevel.

- Atomic numbers 5 through 10 are in the first row of the p block, and the p sublevels start on the second energy level. Therefore, the 5th through 10th electrons go into the $2p$ sublevel.
- Atomic numbers 11 and 12 are in the third row of the s block, so the 11th and 12th electrons go into the $3s$ sublevel.
- Because atomic numbers 13 through 18 are in the p block, we know they go into a p sublevel. Because the p sublevels begin on the second principal energy level and atomic numbers 13 through 18 are in the second row of the p block, the 13th through 18th electrons must go into the $3p$ sublevel.
- The position of atomic numbers 19 and 20 in the fourth row of the s block and the position of atomic numbers 21 through 30 in the first row of the d block show that the $4s$ sublevel fills before the $3d$ sublevel.

Moving through the periodic table in this fashion produces the following order of sublevels up through 6s:



Note that atomic numbers 57 through 70 on the periodic table in Figure 11.16 are in the $4f$ portion of the table. It is a common mistake to forget that the $4f$ sublevel is filled after the $6s$ sublevel and before the $5d$ sublevel. In order to make the overall shape of the table more compact and convenient to display, scientists have adopted the convention of removing the elements with atomic number 57 through 70 and 89 through 102 (the latter being the $5f$ portion of the table) from their natural position between the s and d blocks and placing them at the bottom of the table. Electrons go into the $5f$ sublevel after the $7s$ sublevel and before the $6d$ sublevel. The periodic table in Figure 11.17 shows how the blocks on the periodic table would fit together if the inner transition metals—the f block—were left in their natural position.

Figure 11.17
Periodic Table with the Inner Transition Metals in Their Natural Position

s block		d block										p block																			
1	2	3	4	5	6	7	8	9	10	11	12	13	14	15	16	17	18														
1A	2A	3B	4B	5B	6B	7B	8B	8B	8B	1B	2B	3A	4A	5A	6A	7A	8A														
3 2s	4											5 2p	6	7	8	9	10														
11 3s	12	21 3d	22	23	24	25	26	27	28	29	30	13 3p	14	15	16	17	18														
19 4s	20	39 4d	40	41	42	43	44	45	46	47	48	31 4p	32	33	34	35	36														
37 5s	38											49 5p	50	51	52	53	54														
55 6s	56	57 4f	58	59	60	61	62	63	64	65	66	67	68	69	70	71 5d	72	73	74	75	76	77	78	79	80	81 6p	82	83	84	85	86
87 7s	88	89 5f	90	91	92	93	94	95	96	97	98	99	100	101	102	103 6d	104	105	106	107	108	109	110	111	112	113 7p	114	115	116	117	118

The following sample study sheet shows the general steps for writing complete electron configurations and orbital diagrams for uncharged atoms.

TIP-OFF If you are asked to write a complete electron configuration or an orbital diagram, you can use the following guidelines.

GENERAL STEPS

To write a complete electron configuration for an uncharged atom:

- STEP 1** Determine the number of electrons in the atom from its atomic number.
- STEP 2** Add electrons to the sublevels in the correct order of filling. Add two electrons to each *s* sublevel, 6 to each *p* sublevel, 10 to each *d* sublevel, and 14 to each *f* sublevel.
- STEP 3** To check your complete electron configuration, look to see whether the location of the last electron added corresponds to the element's position on the periodic table. (See Example 11.1.)

To draw an orbital diagram for an uncharged atom,

- STEP 1** Write the complete electron configuration for the atom. (This step is not absolutely necessary, but it can help guide you to the correct orbital diagram.)
- STEP 2** Draw a line for each orbital of each sublevel mentioned in the complete electron configuration.
Draw one line for each *s* sublevel, three lines for each *p* sublevel, five lines for each *d* sublevel, and seven lines for each *f* sublevel.
As a guide to the order of filling, draw your lines so that the orbitals that fill first are lower on the page than the orbitals that fill later.
Label each sublevel.
- STEP 3** For orbitals containing two electrons, draw one arrow up and one arrow down to indicate the electrons' opposite spin.
- STEP 2** For unfilled sublevels, add electrons to empty orbitals whenever possible, giving them the same spin.
The arrows for the first three electrons to enter a *p* sublevel should each be placed pointing up in different orbitals. The fourth, fifth, and sixth are then placed, pointing down, in the same sequence, so as to fill these orbitals.
The first five electrons to enter a *d* sublevel should be drawn pointing up in different orbitals. The next five electrons are drawn as arrows pointing down and fill these orbitals (again, following the same sequence as the first five *d* electrons).
The first seven electrons to enter an *f* sublevel should be drawn as arrows pointing up in different orbitals. The next seven electrons are paired with the first seven (in the same order of filling) and are drawn as arrows pointing down.

EXAMPLE See Example 11.1.

Sample Study Sheet 11.1

Writing Complete Electron Configurations and Orbital Diagrams for Uncharged Atoms

OBJECTIVE 11

OBJECTIVE 12

EXERCISE 11.1 - Electron Configurations and Orbital Diagrams

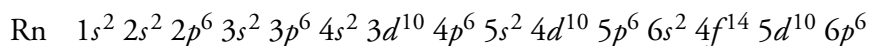
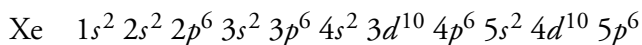
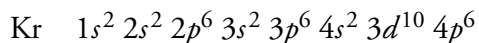
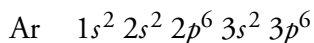
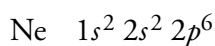
Write the complete electron configuration and draw an orbital diagram for antimony, Sb.

OBJECTIVE 11

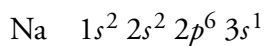
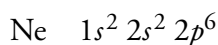
OBJECTIVE 12

Abbreviated Electron Configurations

We learned in Chapter 3 that the noble gases rarely form chemical bonds. This can now be explained in terms of the stability of their electron configurations. The formation of chemical bonds requires atoms to gain, lose, or share electrons, and the electron configurations of the noble gases (displayed below) are so stable that their atoms do not easily undergo any of those changes.



The atoms of other elements (other than hydrogen) contain noble gas configurations as part of their own electron configurations. For example, the configuration of a sodium atom is the same as neon's configuration with the addition of one more electron to the 3s orbital.



The 3s electron of sodium is much more important in the description of sodium's chemical reactions than the other electrons are. There are two reasons why this is true. We know from the stability of neon atoms that the $1s^2 2s^2 2p^6$ configuration is very stable, so these electrons are not lost or shared in chemical reactions involving sodium. These electrons are called the noble gas inner core of sodium. Another reason is that an electron in the larger 3s orbital is less strongly attracted to the nuclear charge than electrons in smaller orbitals in the first and second principal energy levels. As a result, the 3s electron is easier to remove.

Because we are not as interested in the noble gas inner core of electrons for sodium atoms as we are in the 3s electron, sodium atoms are often described with the following abbreviated electron configuration, in which [Ne] represents the electron configuration of neon:



TIP-OFF If you are asked to write an abbreviated electron configuration, you can use the following steps.

GENERAL STEPS

STEP 1 Find the symbol for the element on a periodic table.

For example, to write an abbreviated electron configuration for zinc atoms, we first find Zn on the periodic table (Figure 11.19).

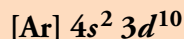
STEP 2 Write the symbol in brackets for the noble gas located at the far right of the preceding horizontal row on the table.

For zinc, we move up to the third period and across to Ar (Figure 11.19). To describe the first 18 electrons of a zinc atom, we write

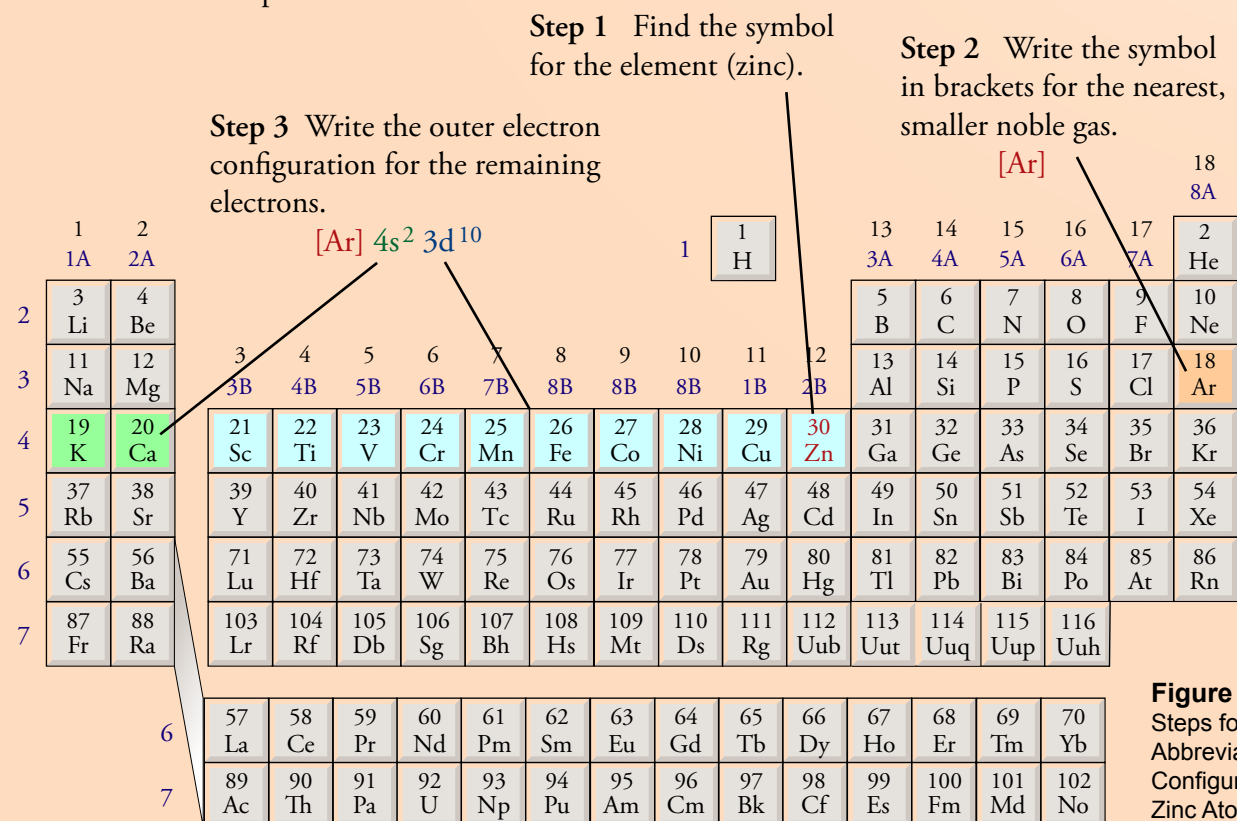


STEP 3 Move back down a row (to the row containing the element you wish to describe) and to the far left. Following the elements in the row from left to right, write the outer-electron configuration associated with each column until you reach the element you are describing.

For zinc, we need to describe the 19th through the 30th electrons. The atomic numbers 19 and 20 are in the fourth row of the *s* block, so the 19th and 20th electrons for each zinc atom enter the $4s^2$ sublevel. The atomic numbers 21 through 30 are in the first row of the *d* block, so the 21st to the 30th electrons for each zinc atom fill the $3d$ sublevel (Figure 11.19). Zinc, with atomic number 30, has the abbreviated configuration



EXAMPLE See Example 11.2.



Sample Study Sheet 11.2

Abbreviated Electron Configurations

OBJECTIVE 13

OBJECTIVE 13

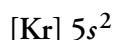
You can get some practice writing abbreviated electron configurations on the textbook's Web site.

EXAMPLE 11.2 - Abbreviated Electron Configurations

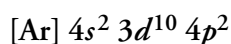
Write abbreviated electron configurations for (a) strontium, Sr, (b) germanium, Ge, and (c) thallium, Tl.

Solution

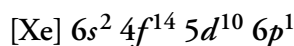
- a. With an atomic number of 38, strontium has 38 electrons. The noble gas element at the end of the previous row is krypton, so putting Kr in brackets describes strontium's first 36 electrons. The atomic numbers 37 and 38 are in the fifth row of the *s* block, indicating that the 37th and 38th electrons enter and fill the 5*s* sublevel.



- b. With an atomic number of 32, germanium has 32 electrons. The noble gas element at the end of the previous row is argon, so putting Ar in brackets describes germanium's first 18 electrons. The atomic numbers 19 and 20 are in the fourth row of the *s* block, so the 19th and 20th electrons enter the 4*s* sublevel. The atomic numbers 21 through 30 are in the first row of the *d* block. Because the *d* sublevels start on the third principal energy level, the 21st through 30th electrons are in the 3*d* sublevel. The atomic numbers 31 and 32 are in the third row of the *p* block, or the 4*p* sublevel (because the *p* sublevels start on the second principal energy level). Thus the last two electrons for a germanium atom are in the 4*p* sublevel.



- c. With an atomic number of 81, thallium has 81 electrons. Its noble gas inner core of electrons has the xenon, Xe, configuration, and its 55th and the 56th electrons are in the 6*s* sublevel. The atomic numbers 57 through 70 are in the first row of the *f* block, so the next 14 electrons are in the 4*f* sublevel. (Remember that the sixth and seventh rows contain an *f* sublevel; this is commonly forgotten.) Electrons 71 through 80 are in the 5*d* sublevel. The atomic number 81 is in the fifth row of the *p* block, or the 6*p* sublevel (because the *p* sublevels start on the second principal energy level). Thus the 81st electron is in a 6*p* orbital.



EXERCISE 11.1 - Electron Configurations and Orbital Diagrams

OBJECTIVE 13

Write abbreviated electron configurations for (a) rubidium, Rb, (b) nickel, Ni, and (c) bismuth, Bi.

Some of the elements have electron configurations that differ slightly from what our general procedure would lead us to predict. You can read more about these at the textbook's Web site. The Web site also shows you how to predict charges on monatomic ions and how to write their electron configurations.

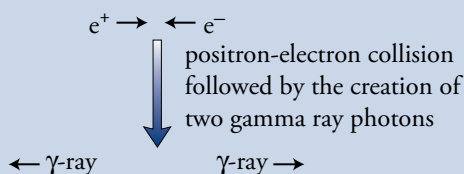
Now that you have learned something about the elements' electron configurations (even though you cannot say precisely what an electron is), Chapter 12 will show you how the configurations can be used to explain patterns of bonding and the structure of molecules.

SPECIAL TOPIC 11.1 Why Does Matter Exist, and Why Should We Care About This Question?

A great deal of money, time, and scientific expertise are spent on trying to answer questions such as, “*What is the nature of matter, and why does it exist?*” When it comes time for lawmakers to distribute tax money and for executives in industry or academia to plan their research goals, it is natural for them, in turn, to wonder, “*Shouldn’t we direct our energies and money toward more practical goals? Isn’t it much more important to develop procedures for early diagnosis and treatment of Alzheimer’s disease rather than spend our limited resources on understanding how the universe came to be?*” These sorts of questions are at the core of an on-going debate between people who believe strongly in basic research, the seeking of knowledge for its own sake without a specific application in mind, and those who prefer to focus on applied research, the attempt to develop a specific procedure or product.

Often, basic research leads to unforeseen practical applications. Quantum mechanics, the wave mathematics used to predict the shapes and sizes of atomic orbitals, provides an example. In 1931 Paul Adrien Dirac, one of the pioneers of quantum mechanics, found an unexpected minus sign in the equations he was developing to describe the nature of matter. He could have ignored this problem in the hope that it would disappear with further refinement of the equations, but Dirac took a much bolder approach instead. He suggested that the minus sign indicated the existence of a particle identical to the electron except that it has a positive charge instead of a negative charge. This “anti-electron,” which was detected in the laboratory by Carl Anderson in 1932, came to be called a positron, e^+ .

Apparently, every particle has a twin antiparticle, and they are formed together from very concentrated energy. In 1955 and 1956, antiprotons and antineutrons were created and detected. The general name for antiparticles is antimatter. As the terminology suggests, when a particle meets its antimatter counterpart, they annihilate each other, leaving pure energy in their place. For example, when a positron collides with an electron, they both disappear, sending out two gamma ray photons (γ -ray) in opposite directions.



Originally, there was no practical application for the discovery of antimatter, although its existence suggested possible answers to some very big questions. Perhaps the universe was originally created from the conversion of some extremely concentrated energy source into matter and antimatter. However, while some scientists continue to do basic research on the nature of matter and antimatter, others are using the knowledge and techniques developed through this basic research to actively seek practical applications. One use of the antimatter created in the laboratory is called positron emission tomography (PET). With the help of a large team of scientists and computer experts, physicians use PET to scan the brain in search of biochemical abnormalities that signal the presence of Alzheimer’s disease, schizophrenia, epilepsy, brain tumors, and other brain disorders.

In PET, radioactive substances that emit positrons are introduced into a patient’s bloodstream. As the radioactive atoms decay, the positrons they emit collide with electrons, producing gamma rays that escape from the body and are detected by an array of instruments surrounding the patient. Computer analysis of the amount and direction of gamma ray production, and comparison of the data collected for people with and without certain brain disorders provides doctors with valuable information. For example, PET scans of the brain have been used to study the movement of the medication L-dopa in the brains of people suffering from Parkinson’s disease. In these procedures, fluorine-18 atoms are attached to L-dopa molecules, which are then injected into a patient. Each fluorine-18 decays and emits a positron that generates gamma rays when it meets an electron.

Similar experiments are providing information about physiological processes such as glucose metabolism, the effects of opiate drugs, and the mechanisms of memory retrieval. Without the basic research, PET technology could never have been imagined, and it is just one of the many reasons why we should continue to ask fundamental questions such as, “*Why are we here?*” and “*How do things work?*”

Chapter Glossary

Waveform A representation of the shape of a wave.

Nodes The locations in a waveform where the intensity of the wave is always zero.

Orbitals The allowed waveforms for the electron. This term can also be defined as a volume that contains a high percentage of the electron charge or as a volume within which an electron has a high probability of being found.

Principal energy level or shell A collection of orbitals that have the same potential energy for a hydrogen atom, except for the first (lowest) principal energy level, which contains only one orbital ($1s$). For example, the $2s$ and $2p$ orbitals are in the second principal energy level.

Ground state The condition of an atom whose electrons are in the orbitals that give it the lowest possible potential energy.

Excited state The condition of an atom that has at least one of its electrons in orbitals that do not represent the lowest possible potential energy.

Sublevel or Subshell One or more orbitals that have the same potential energy, the same size, and the same shape. For example, the second principal energy level contains a $2s$ sublevel (with one spherical orbital) and a $2p$ sublevel (with three dumbbell-shaped orbitals).

Orbital diagram A drawing that uses lines or squares to show the distribution of electrons in orbitals and arrows to show the relative spin of each electron.

Electron configuration A description of the complete distribution of an element's electrons in atomic orbitals. Although a configuration can be described either with an orbital diagram or with its shorthand notation, this text will follow the common convention of referring to the shorthand notation that describes the distribution of electrons in sublevels without reference to the spin of the electrons as an electron configuration.

You can test yourself on the glossary terms at the textbook's Web site.

Chapter Objectives

The goal of this chapter is to teach you to do the following.

1. Define all of the terms in the Chapter Glossary.

Section 11.1 The Mysterious Electron

2. Explain why, in theory, a guitar string can vibrate with an infinite number of possible waveforms, but why not all waveforms are possible.
3. Describe how electrons are like vibrating guitar strings.
4. Describe the $1s$ orbital in a hydrogen atom in terms of negative charge and in terms of the electron as a particle.
5. Explain why electrons in atoms are often described in terms of electron clouds.
6. Describe a $2s$ orbital for a hydrogen atom.
7. Explain why an electron in a hydrogen atom has lower potential energy in the $1s$ orbital than the $2s$ orbital.
8. Describe the three $2p$ orbitals for a hydrogen atom.
9. Draw, describe, or recognize descriptions or representations of the $3s$, $3p$, and $3d$ orbitals.

Section 11.2 Multi-Electron Atoms

10. Describe the difference between any two electrons in the same atomic orbital.
11. Write complete electron configurations for all of the elements on the periodic table that follow the normal order of filling of the sublevels.
12. Draw orbital diagrams for all of the elements on the periodic table that follow the normal order of filling of the sublevels.
13. Write abbreviated electron configurations for all of the elements on the periodic table that follow the normal order of filling of the sublevels.

-
1. Describe the nuclear model of the atom.
 2. Describe the relationship between stability and potential energy.

Review
Questions

Complete the following statements by writing one of these words or phrases in each blank.

Key Ideas

analogies	particle
calculated for hydrogen	particle interpretation
cloud	positions
<i>d</i>	possible
decreased	principal
definitely	probabilities
diminishes	probably
electron configuration	<i>s</i> orbitals
exactly	seven
five	seventh
high percentage	spherical
hydrogen	spinning
impossible	spins
inner transition metals	spontaneously returns
intense	strange
intensity of the movement	strength
intensity of the negative charge	sublevel
mathematics	three
modern physics	three-dimensional
motion	two
<i>n</i>	unpaired
negative charge	volume
nine	wave
other elements	waveforms
<i>p</i> block	

3. The electron is extremely tiny, and modern physics tells us that _____ things happen in the realm of the very, very small.
4. The modern description of the electron is based on complex _____ and on the discoveries of _____.
5. Modern physics tells us that it is _____ to know _____ where an electron is and what it is doing.

6. There are two ways in which scientists deal with the problems associated with the complexity and fundamental uncertainty of the modern description of the electron, _____ and _____.
7. In order to accommodate the uncertainty of the electron's position and motion, scientists talk about where the electron _____ is within the atom, instead of where it _____ is.
8. Each electron seems to have a dual nature in which both _____ and _____ characteristics are apparent.
9. In the wave view, an electron has an effect on the space around it that can be described as a wave of _____ varying in its intensity.
10. The _____ for electrons in an atom describe the variation in intensity of negative charge within the atom, with respect to the location of the nucleus. This can be described without mentioning the _____ and _____ of the electron particle itself.
11. Just as the _____ of a guitar string can vary, so can the _____ of the electron vary at different positions outside the nucleus.
12. The variation in the intensity of the electron charge can be described in terms of a(n) _____ standing wave like the standing wave of the guitar string.
13. As in the case of the guitar string, only certain waveforms are _____ for the electron in an atom.
14. Most of the general descriptions of electrons found in this chapter are based on the wave mathematics for the one electron in a(n) _____ atom.
15. The information calculated for the hydrogen electron is used to describe the _____ as well.
16. For the $1s$ orbital, the negative charge is most _____ at the nucleus and _____ with increasing distance from the nucleus.
17. The allowed waveforms for the electron are also called orbitals. Another definition of orbital is as the volume that contains a given _____ of the electron charge. An orbital can also be defined as the _____ within which an electron has a high probability of being found.
18. According to the _____ of the wave character of the electron, the surface that surrounds 90% of an electron's charge is the surface within which we have a 90% probability of finding the electron.
19. In the particle view, the electron _____ can be compared to a multiple exposure photograph of the electron.
20. All _____ electron waveforms are called s orbitals.
21. Because the _____ of the attraction between positive and negative charges decreases with increasing distance between the charges, an electron is more strongly attracted to the nucleus and therefore is more stable when it has the smaller $1s$ waveform than when it has the larger $2s$ waveform. Increased stability is associated with _____ potential energy, so a $1s$ electron has lower potential energy than a $2s$ electron.
22. All of the orbitals that have the same potential energy for a hydrogen atom are said to be in the same _____ energy level.
23. After the electron is excited from the $1s$ orbital to the $2s$ orbital, it _____ to its lower-energy $1s$ form.
24. There are _____ possible $2p$ orbitals.

25. Orbitals that have the same potential energy, the same size, and the same shape are in the same _____.
26. In the third principal energy level, there are _____ possible orbitals for an electron, in three different sublevels.
27. Note that the first principal energy level has one sublevel, the second has two, the third has three, and the fourth has four. If _____ is the number associated with the principal energy level, each principal energy level has n sublevels.
28. Each s sublevel has one orbital, each p sublevel has three orbitals, each d sublevel has _____ orbitals, and each f sublevel has _____ orbitals.
29. None of the known elements in its ground state has any electrons in a principal energy level higher than the _____.
30. Scientist assume that all of the elements have the same set of possible principal energy levels, sublevels, and orbitals that has been _____.
31. We can visualize the two electrons in a helium atom as _____ in opposite directions.
32. In the broadest sense, a(n) _____ is any description of the complete distribution of electrons in atomic orbitals.
33. An atomic orbital may contain _____ electrons at most, and the electrons must have different _____.
34. When electrons are filling orbitals of the same energy, they enter orbitals in such a way as to maximize the number of _____ electrons, all with the same spin. In other words, they enter empty orbitals first, and all electrons in half-filled orbitals have the same spin.
35. The highest-energy electrons for all of the elements in groups 1 (1A) and 2 (2A) in the periodic table are in _____.
36. All of the elements in the block with boron, B, neon, Ne, thallium, Tl, and radon, Rn, at the corners have their highest-energy electrons in p orbitals, so this is called the _____.
37. The last electrons to be added to an orbital diagram for the atoms of the transition metal elements go into _____ orbitals.
38. The section of the periodic table that contains the _____ is called the f block.

Section 11.1 The Mysterious Electron

39. Explain why, in theory, a guitar string can vibrate with an infinite number of possible waveforms, but why not all waveforms are possible. **OBJECTIVE 2**
40. Describe how electrons are like vibrating guitar strings. **OBJECTIVE 3**
41. Describe the $1s$ orbital in a hydrogen atom in terms of negative charge and in terms of the electron as a particle. **OBJECTIVE 4**
42. Explain why electrons in atoms are often described in terms of electron clouds. **OBJECTIVE 5**
43. Describe a $2s$ orbital for a hydrogen atom. **OBJECTIVE 6**
44. Explain why an electron has lower potential energy in the $1s$ orbital than the $2s$ orbital for a hydrogen atom. **OBJECTIVE 7**

Chapter Problems

45. Which is larger, a $2p$ orbital or a $3p$ orbital? Would the one electron in a hydrogen atom be more strongly attracted to the nucleus in a $2p$ orbital or in a $3p$ orbital? Would the electron be more stable in a $2p$ orbital or in a $3p$ orbital? Would the electron have higher potential energy when it is in a $2p$ orbital or a $3p$ orbital?
46. Which is larger, a $3d$ orbital or a $4d$ orbital? Would the one electron in a hydrogen atom be more strongly attracted to the nucleus in a $3d$ orbital or in a $4d$ orbital? Would the electron be more stable in a $3d$ orbital or in a $4d$ orbital? Would the electron have higher potential energy when it is in a $3d$ orbital or a $4d$ orbital?

OBJECTIVE 8

47. Describe the three $2p$ orbitals for a hydrogen atom.

OBJECTIVE 9

48. Write descriptions of the $3s$, $3p$, and $3d$ orbitals.
49. How many sublevels are in the fourth principal energy level for the hydrogen atom? What is the shorthand notation used to describe them? (For example, there is one sublevel in the first principal energy level, and it is described as $1s$.)
50. How many orbitals are there in the $3p$ sublevel for the hydrogen atom?
51. How many orbitals are there in the $4d$ sublevel for the hydrogen atom?
52. How many orbitals are there in the third principal energy level for the hydrogen atom?
53. How many orbitals are there in the fourth principal energy level for the hydrogen atom?
54. Which of the following sublevels do not exist?
- | | | | |
|---------|---------|---------|---------|
| a. $5p$ | b. $2s$ | c. $3f$ | d. $6d$ |
|---------|---------|---------|---------|
55. Which of the following sublevels do not exist?
- | | | | |
|---------|---------|---------|---------|
| a. $1p$ | b. $5d$ | c. $6f$ | d. $1s$ |
|---------|---------|---------|---------|

Section 11.2: Multi Electron Atoms

OBJECTIVE 10

56. Describe the difference between any two electrons in the same atomic orbital.
57. What is the maximum number of electrons that can be placed in a $3p$ orbital?... in a $3d$ orbital?
58. What is the maximum number of electrons that can be placed in a $5s$ orbital?... in a $5f$ orbital?
59. What is the maximum number of electrons that can be placed in a $3p$ sublevel?... in a $3d$ sublevel?
60. What is the maximum number of electrons that can be placed in a $5s$ sublevel?... in a $5f$ sublevel?
61. What is the maximum number of electrons that can be placed in the third principal energy level?
62. What is the maximum number of electrons that can be placed in the fourth principal energy level?
63. For each of the following pairs, identify the sublevel that is filled first.
- | | | | |
|-----------------|-----------------|-----------------|-----------------|
| a. $2s$ or $3s$ | b. $3p$ or $3s$ | c. $3d$ or $4s$ | d. $4f$ or $6s$ |
|-----------------|-----------------|-----------------|-----------------|
64. For each of the following pairs, identify the sublevel that is filled first.
- | | | | |
|-----------------|-----------------|-----------------|-----------------|
| a. $2p$ or $3p$ | b. $5s$ or $5d$ | c. $4d$ or $5s$ | d. $4f$ or $5d$ |
|-----------------|-----------------|-----------------|-----------------|

65. Write the complete electron configuration and orbital diagram for each of the following.

- carbon, C
- phosphorus, P
- vanadium, V
- iodine, I
- mercury, Hg

OBJECTIVE 11

OBJECTIVE 12

66. Write the complete electron configuration and orbital diagram for each of the following.

- oxygen, O
- sulfur, S
- manganese, Mn
- tellurium, Te
- radon, Rn

OBJECTIVE 11

OBJECTIVE 12

67. Which element is associated with each of the ground state electron configurations listed below?

- $1s^2 2s^2$
- $1s^2 2s^2 2p^6 3s^1$
- $1s^2 2s^2 2p^6 3s^2 3p^6 4s^2 3d^{10} 4p^5$
- $1s^2 2s^2 2p^6 3s^2 3p^6 4s^2 3d^{10} 4p^6 5s^2 4d^{10} 5p^6 6s^2 4f^{14} 5d^{10} 6p^2$

68. Which element is associated with each of the ground state electron configurations listed below?

- $1s^2 2s^2 2p^3$
- $1s^2 2s^2 2p^6 3s^2 3p^6$
- $1s^2 2s^2 2p^6 3s^2 3p^6 4s^2 3d^{10}$
- $1s^2 2s^2 2p^6 3s^2 3p^6 4s^2 3d^{10} 4p^6 5s^2 4d^{10} 5p^6 6s^2$

69. Would the following electron configurations represent ground states or excited states?

- $1s^2 2s^1 2p^5$
- $1s^2 2s^2 2p^4$
- $1s^2 2s^2 2p^4 3s^1$
- $1s^2 2s^2 2p^5$

70. Would the following electron configurations represent ground states or excited states?

- $1s^2 2s^2 2p^6 3s^2$
- $1s^2 2s^2 2p^6 3s^1 3p^1$
- $1s^2 2s^2 2p^6 3s^2 3p^6 4s^2 3d^8 4p^1$
- $1s^2 2s^2 2p^6 3s^2 3p^6 4s^2 3d^9$

71. Write the abbreviated electron configurations for each of the following.

- fluorine, F
- silicon, Si
- cobalt, Co
- indium, In
- polonium, Po
- palladium, Pd

OBJECTIVE 13

OBJECTIVE 13

72. Write the abbreviated electron configurations for each of the following.
- chlorine, Cl
 - boron, B
 - scandium, Sc
 - yttrium, Y
 - astatine, At

Additional Problems

73. Which sublevel contains:
- the highest-energy electron for francium, Fr?
 - the 25th electron added to an orbital diagram for elements larger than chromium, Cr?
 - the 93rd electron added to an orbital diagram for elements larger than uranium, U?
 - the 82nd electron added to an orbital diagram for elements larger than lead, Pb?
74. Which sublevel contains:
- the highest-energy electron for strontium, Sr?
 - the 63rd electron added to an orbital diagram for elements larger than samarium, Sm?
 - the 33rd electron added to an orbital diagram for elements larger than germanium, Ge?
 - the 75th electron added to an orbital diagram for elements larger than tungsten, W?
75. What is the first element on the periodic table to have
- an electron in the $3p$ sublevel.
 - a filled $4s$ sublevel.
 - a half-filled $3d$ sublevel.
76. What is the first element on the periodic table to have
- an electron in the $5s$ sublevel.
 - a filled $4d$ sublevel.
 - a half-filled $6p$ sublevel.
77. Which pair of the following ground-state, abbreviated electron configurations corresponds to elements in the same group on the periodic table? What elements are they? What is the name of the group to which they belong?
- $[\text{Ne}] 3s^2$
 - $[\text{Ar}] 4s^2 3d^{10}$
 - $[\text{Kr}] 5s^2$
 - $[\text{Xe}] 6s^2 4f^{14} 5d^{10} 6p^1$
78. Which pair of the following ground-state, abbreviated electron configurations corresponds to elements in the same group on the periodic table? What elements are they? What is the name of the group to which they belong?
- $[\text{Ar}] 4s^2 3d^{10} 4p^3$
 - $[\text{Ne}] 3s^2 3p^5$
 - $[\text{Xe}] 6s^2$
 - $[\text{Kr}] 5s^2 4d^{10} 5p^5$

79. What is the maximum number of electrons in each of the following?
- the $8j$ sublevel
 - a $6h$ orbital
 - the $n = 8$ principal energy level
80. What is the maximum number of electrons in each of the following?
- the $9k$ sublevel
 - a $12n$ orbital
 - the $n = 9$ principal energy level
81. Draw a sketch of how the orbitals for the electron clouds for all of the electrons in a phosphorus atom are superimposed on each other.
82. Write the expected abbreviated electron configuration for the as-yet-undiscovered element with an atomic number of 121. Use Uuo for the symbol of the noble gas below xenon, Xe. (Hint: See Figure 11.17.)
83. Write the expected abbreviated electron configuration for the as-yet-undiscovered element with an atomic number of 139. Use Uuo for the symbol of the noble gas below xenon, Xe. (Hint: See Figure 11.17.)
84. Draw a periodic table like the one in Figure 11.17 but showing the $5g$ sublevel in its correct position.

Discussion Topics

85. Do you think electrons are more like baseballs or guitar strings?
86. What do you think of the following statement? "*We will never know about the true nature of the electron.*"
87. Do you think that there is some understanding of nature that is just beyond our ability to attain? What do you think about the following statement? "*Just as all dogs have a limit to their ability to understand things, humans also have a limit.*"
88. With which of the following two statements do you most agree?
- "*The main criterion for accepting a scientific model, such as our model for the electron, is whether or not it is **true**.*"
- "*The main criterion for accepting a scientific model, such as our model for the electron, is whether or not it is **useful**.*"